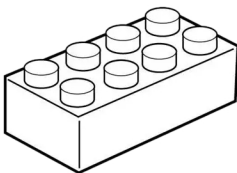
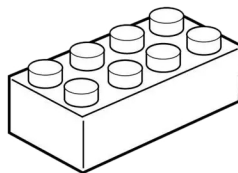
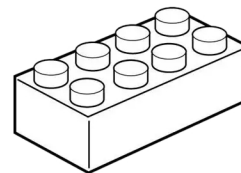


3D Bar Graphs

Count the blocks on your baseplate and color the same number of rectangles below.
Then, write the number underneath.







Which number is the biggest? _____

Which number is the smallest? _____

Write the numbers from smallest to biggest:

Write the numbers from biggest to smallest:

Remember: It's okay to take a break in the middle of a lesson!